

Manual Test

DO NOT WRITE ON THIS TEST


1. Operator's licenses for persons under 18 years of age are:
 - a. Standard
 - b. Commercial
 - c. Probationary
 - d. Public Passenger

2. Drivers must use headlights:
 - a. dusk – dawn
 - b. Sunset – Sunrise
 - c. ½ hour before sunset
 - d. 1 hour after sunrise


3. A good defensive driver:
 - a. Pays attention
 - b. Looks out for the action of others
 - c. Brakes
 - d. None of the above

4. A driver must _____ for a funeral procession:
 - a. Slow
 - b. Yield
 - c. Proceed past
 - d. None of the above

5. Any person who operates a vehicle on roadways agrees to submit to:
 - a. License checks
 - b. Chemical test
 - c. Insurance checks
 - d. None of the above

6. 
 - a. Stop sign
 - b. School Zone sign
 - c. Regulatory sign
 - d. Information sign

7. The maximum speed limit for a passenger motor vehicle on a rural interstate highway is:
 - a. 75
 - b. 70
 - c. 55
 - d. 45

8. 
 - a. Lane ends
 - b. Divided highway ends
 - c. Merging traffic
 - d. Slippery when wet

9. When a driver approaches a railroad crossing, they should:
 - a. Stop-look-listen
 - b. Look both ways
 - c. Slow-look-listen-be prepared to stop
 - d. Proceed with caution

10. A permit must be held for a minimum of _____ days before applying for an operator's license:
 - a. 30
 - b. 60
 - c. 90
 - d. 180


11. Lower headlight beams must be used _____ approaching an oncoming vehicle:
 - a. 200 feet
 - b. 300 feet
 - c. 400 feet
 - d. 500 feet

12. Yellow lane markings:
 - a. Divide 1-way traffic
 - b. Divide the median
 - c. Mark stop line
 - d. Divide 2-way traffic

13. A driver should remember that trucks
 - a. stop as quickly as a car
 - b. take longer to stop than a car
 - c. stop quicker than a car
 - d. none of the above

14. A BAC of _____ or higher is evidence of driving while intoxicated:

- a. .05 b. .08 c. .10 d. .12

15.  a. School Zone sign b. Railroad sign c. Regulatory sign d. Information sign

16. The maximum speed limit for state highways is:

- a. 75 b. 70 c. 60 d. 45

17.  a. Lane ends b. Curves ahead c. Merging traffic d. Slippery when wet

18. A driver does not have to stop for a school bus on the opposite side of the road when

- a. There are 4 or more lanes b. there is a median strip with 2 or more lanes
c. There are no exceptions d. None of the above

19. An operator's license for a driver under 75 years of age is valid for:

- a. 1 year b. 2 years c. 3 years d. 6 years

20. Lower headlight beams must be used _____ when following a vehicle:

- a. 200 feet b. 300 feet c. 400 feet d. 500 feet

21. If traveling 45 mph, a signal must be used _____ before turning:

- a. 100 feet b. 200 feet c. 300 feet d. 400 feet

22. Remember, if you cannot see the truck driver in his side mirror:

- a. He cannot see you b. He can see you c. He cannot stop d. He can stop


23. If involved in a crash, the first thing a driver should do is:

- a. Exchange information b. Contact police c. Check injuries d. Stop immediately

24.  a. School Zone sign b. Railroad sign c. Regulatory sign d. Information sign

25. A driver must drive the slower speed limit in a school area when:

- a. Children are present b. School hours c. All times d. None of the above

26.  a. Truck zone b. Slippery when wet c. Long or steep downgrade
d. overpass ahead

27. All school buses, public passenger vehicles and vehicles carrying hazardous materials must _____ at all railroad crossings.

- a. Slow b. Look c. Stop d. Nothing

28. An operator's license for a driver over 75 years of age is valid for:

- a. 1 year b. 2 years c. 3 years d. 4 years

(next page)

29. If your vehicle skids, you should turn the steering wheel:
- a. Opposite direction the rear is skidding
 - b. Straight ahead
 - c. Same direction the rear is skidding
 - d. Pump the brakes
30. If traveling 50 mph, a signal must be used _____ before turning:
- a. 100 feet
 - b. 200 feet
 - c. 300 feet
 - d. 400 feet

BMV DRIVER MANUAL TEST

Mark in the letter of the answer in the corresponding letter on the scantron sheet.



1. This sign is red and eight-sided.
a. Stop b. Railroad crossing c. School zone crossing d. Warning



2. This sign is circular and yellow.
a. School zone b. Stop c. Railroad crossing d. Warning



3. This sign is square, red and white and convey regulations that the Driver must follow.
a. School zone b. Stop c. Railroad d. Regulatory



4. This sign is 5-sided and is yellow or yellow-green.
a. Regulatory b. School zone c. Stop d. Railroad



5. This sign is a four-sided, diamond-shaped and yellow.
a. Warning b. Regulatory c. Stop d. School zone



6. This sign is rectangular and white and provides important Regulations that drivers must obey.
a. Regulatory b. Yield c. Railroad crossing d. Stop



7. This sign is 3-sided, red and white.
a. Regulatory b. Yield c. Railroad crossing d. Stop



8. This sign is a yellow pennant shaped sign.
a. Regulatory b. Yield c. Railroad crossing d. No passing zone

9. When a driver comes to a red flashing light
a. the driver can slow down and go
b. the driver has to come to a complete stop before entering the intersection.
c. the driver can go without stopping.
d. the driver has to stop and wait until the light changes.

(over)

10. When parked facing downhill a driver should
 - a. turn the wheels away from the curb
 - b. turn the wheels toward the curb
 - c. turn the wheels straight
 - d. park with the wheels on the curb

11. A vehicle backing out of a parking place
 - a. has the right of way
 - b. should look both ways and double-check for pedestrians
 - c. back out quickly
 - d. honk and back out

12. The maximum speed for a truck over 26,000 lbs on the interstate highway is
 - a. 75 mph
 - b. 65 mph
 - c. 45 mph
 - d. 55 mph

13. It is illegal for a driver on an interstate highway to
 - a. pass in the left lane
 - b. make a U-turn
 - c. go 70 mph in a passenger vehicle
 - d. pull over to the shoulder if there is an emergency

14. Common hours for a school zone are
 - a. 5:00 A.M. and 2:30 P.M.
 - b. 5:30 A.M. and 5:00 P.M.
 - c. 7:00 A.M. and 4:30 P.M.
 - d. 9:00 A.M. and 6:00 P.M.

15. The maximum speed limit in a highway work zone is
 - a. 35 mph
 - b. 65 mph
 - c. 55 mph
 - d. 45 mph

16. A driver in Indiana is determined to be legally intoxicated when they have a blood level of
 - a. 1.8
 - b. .08
 - c. 2.0
 - d. .03

17. A person who refuses to take a breathalyzer test will
 - a. be able to drive home carefully
 - b. have their license immediately confiscated
 - c. be able to drive home when they sober up
 - d. have their friends come and get them